

Name _____



Homework & Practice 12-4


Continue to Measure Length

Another Look! You can use different objects, such as pennies, to measure.


Measure the length of each object using pennies.



4 is the greater number, so the duck is the longer object.



about 4  long



about 2  long

HOME ACTIVITY

One penny is about $\frac{3}{4}$ -inch long/tall. Work with your child to find an object that is approximately 1 penny long or 1 penny tall. Repeat for 2–5 pennies.

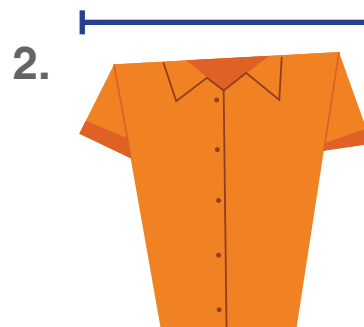


Find each object in your house. Measure the length with pennies.



Shoe

about _____  long



Shirt

about _____  long



Spoon

about _____  long


Find each object in your house. Measure the length with pennies.

4.



about _____  long

5.



about _____  long


6.




about _____  tall

7. **Higher Order Thinking** Which of the objects above is the longest? Which is the shortest? Explain how you know.

8. **Assessment** Measure the height of the rectangle. Write the number.



The rectangle is _____  tall.