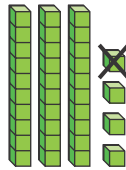


Homework & Practice 9-1

I More, I Less; 10 More, 10 Less

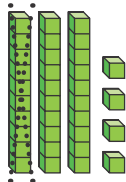
Another Look! You can use place-value blocks to show 1 more than, 1 less than, 10 more than, or 10 less than.



You can cross out 1 cube to show 1 less than 34.

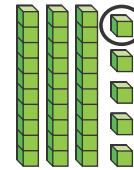
34

1 less than 34 is 33.



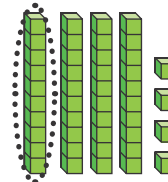
You can cross out 1 ten to show 10 less than 34.

10 less than 34 is 24.



You can add 1 more cube to show 1 more than 34.

1 more than 34 is 35.



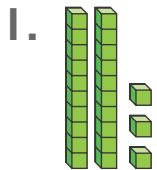
You can add 1 more ten to show 10 more than 34.

10 more than 34 is 44.

HOME ACTIVITY Write a two-digit number. Have your child write the numbers that are 1 more than, 1 less than, 10 more than, and 10 less than the number. Provide pennies as counters if needed. Continue with several two-digit numbers.

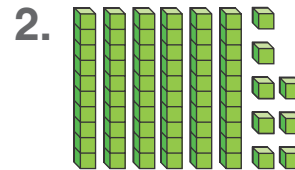


Complete each sentence.



1 more than 23 is _____.

1 less than 23 is _____.



10 less than 68 is _____.

10 more than 68 is _____.

Solve each problem below. You can draw pictures to help you.

3. **24**

1 more than 24 is _____.

1 less than 24 is _____.

10 more than 24 is _____.

10 less than 24 is _____.

4. **67**

1 more than 67 is _____.

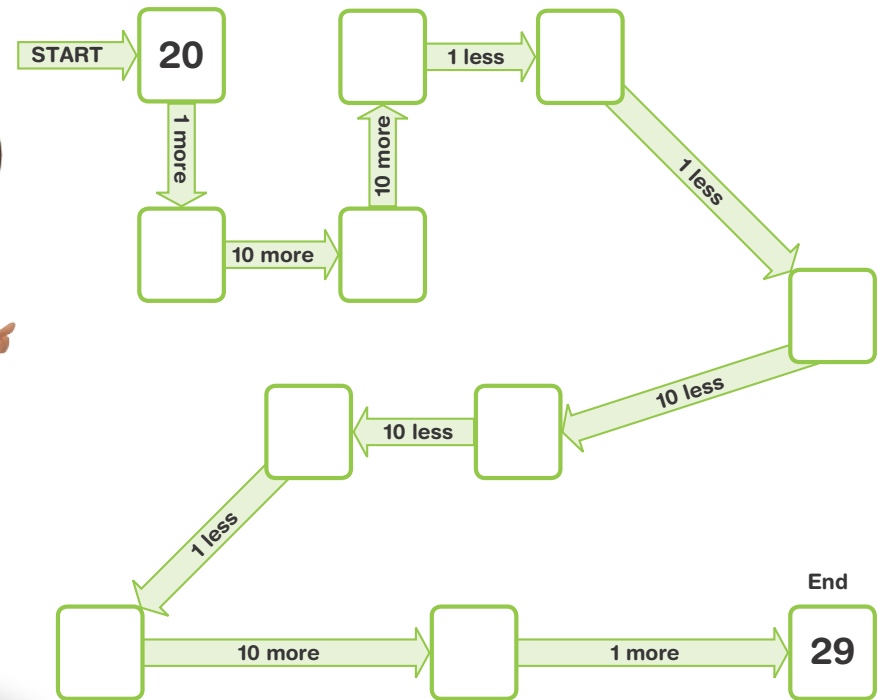
1 less than 67 is _____.

10 more than 67 is _____.

10 less than 67 is _____.

5. **Higher Order Thinking** Follow the arrows. Write the number that is 1 more, 1 less; 10 more, or 10 less.

You can draw pictures to help you.



6. **Assessment**

Match each number with its description.

23

1

13

55

10 more than 3

1 more than 54

10 less than 33

1 less than 2