

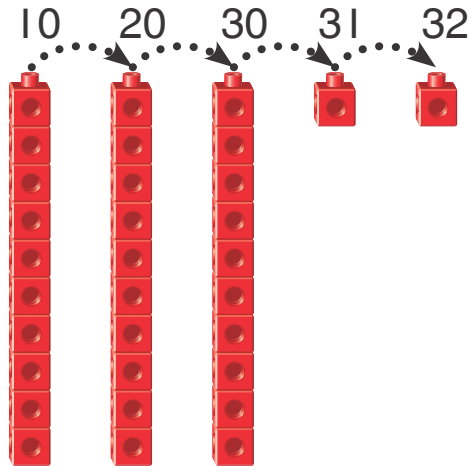
Name _____



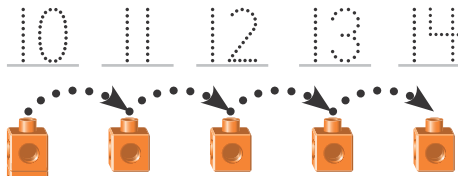
Homework & Practice 8-3

Count with Groups of Tens and Leftovers

Another Look! You can count by 10s and then the leftover 1s.



3 groups of 10 2 left over
32 in all



1 group of 10 4 left over
14 in all

HOME ACTIVITY Place 25 pennies in a pile. Have your child make groups of 10 pennies. Ask, "How many groups of 10 pennies? How many pennies are left over?" Repeat with up to 40 pennies.



Count by 10s and 1s. Write the numbers.

1. _____

_____ groups of 10
_____ left over
_____ in all

2. _____

_____ groups of 10
_____ left over
_____ in all

Write the missing number.

3. _____ is 1 group of 10 and 2 left over.


4. 31 is _____ groups of 10 and 1 left over.

5. 14 is 1 group of 10 and _____ left over.


6. _____ is 2 groups of 10 and 7 left over.

7. **Higher Order Thinking** 10 beads fit on a bracelet. Ben has 34 beads in all. How many bracelets can he make with 10 beads on each?

Draw a picture to show the bracelets he can make with his beads. Then draw the beads that will be left over.



8. **Assessment** How many groups of 10 are there in the number 38? How many left over? Tell how you know.



Think about what "left over" means.

