

Name _____

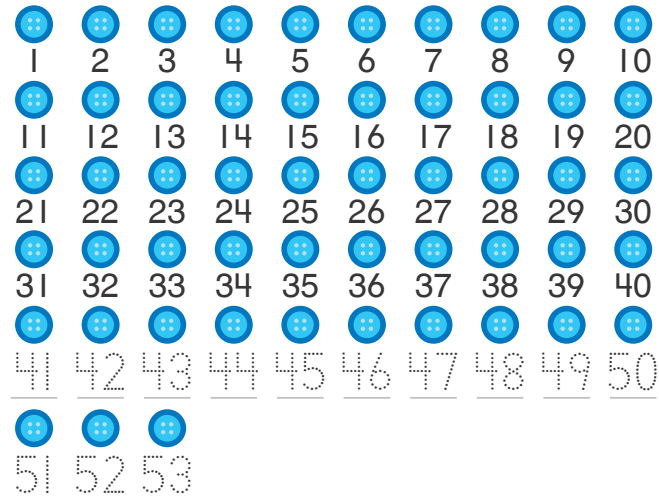


Homework & Practice 7-6

Count and Write Numerals


Another Look! You can count groups of objects by 1s or 10s.

When you count by 1s, you count each object separately.



There are 53 buttons.

When you count by 10s, you count groups of 10, and then add the 1s.

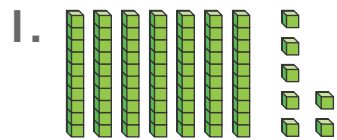


There are 53 buttons.

HOME ACTIVITY Set up a pile of between 50 and 120 small objects. Ask your child to count them in the fastest way he or she can think of. Remind your child that sorting the objects into groups or counting more than one at a time will make it easier. Repeat with a different amount in between 50 and 120.

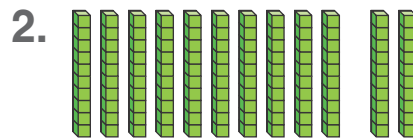


Count the tens and ones. Then write how many in all.



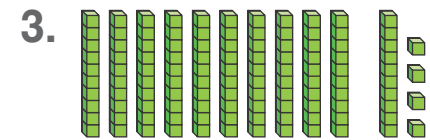
_____ tens _____ ones

Total _____



_____ tens _____ ones


Total _____




_____ tens _____ ones

Total _____

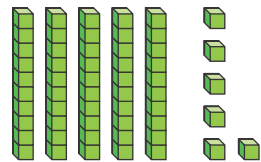
Count the objects. Show how you counted. Then write how many in all.





6. **Higher Order Thinking** Explain why counting by tens might be faster than counting by ones.

7.  **Assessment** How many tens and ones are shown?



- (A) 4 tens and 5 ones
- (B) 4 tens and 6 ones
- (C) 5 tens and 5 ones
- (D) 5 tens and 6 ones