

Name _____

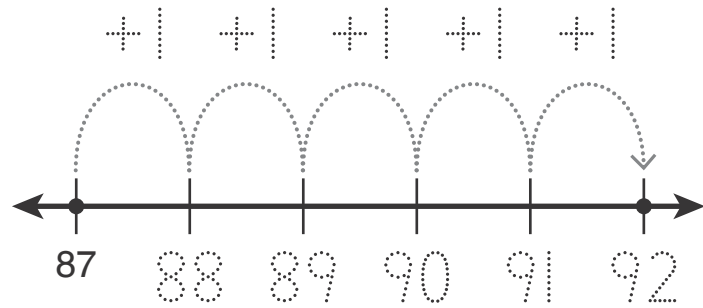


Homework & Practice 7-5

Count on an Open Number Line

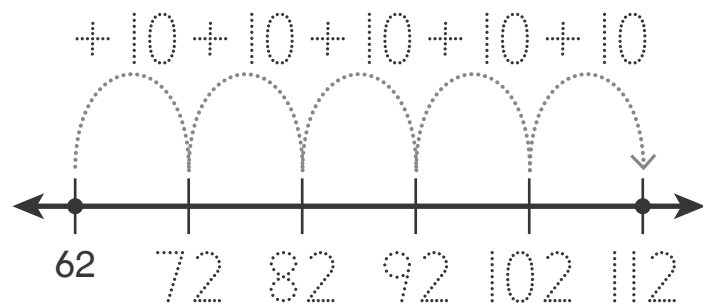
Another Look! Counting on is like adding.

Start at 87. Count on by 1s to 92.



You add 1 each time you count!

Start at 62. Count on by 10s to 112.



You add 10 each time you count!

HOME ACTIVITY Draw two simple number lines with no labels. Ask your child to use the first number line to count by 1s from 53 to 58. Ask your child to use the second number line to count by 10s from 67 to 107.



Show your counting on the open number line. You can use addition to help.

I. Start at 115. Count on by 1s to 120.



Show your counting on the open number lines. You can use addition to help.

2. **Math and Science** There are 16 baby chicks sleeping in a hen house. Outside the hen house, there are 6 more baby chicks chirping for their mothers. How many baby chicks in all?



3. Start at 18. Count on by 10s to 78.



4. **Higher Order Thinking** Lorna starts counting at 48.

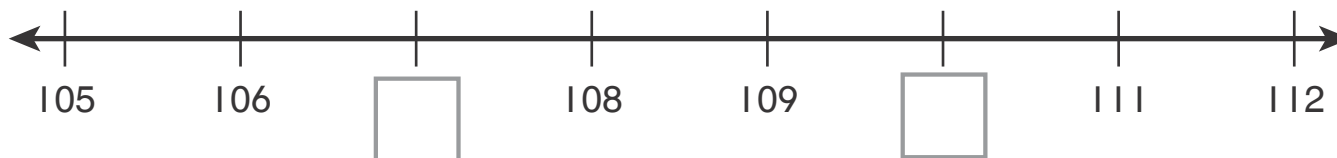
She counts on by 10s four times.

Then she counts on by 1s three times.

What was the last number she said?

Tell how you know.

5. **Assessment** Ben showed part of his counting on this number line. Fill in the missing numbers. Complete the sentence.



Ben counted by _____ from _____ to _____.